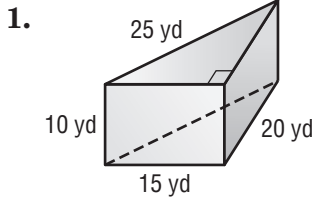


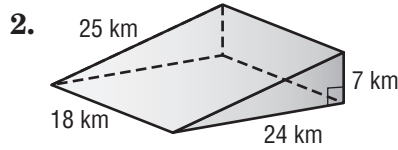
Lesson 4 Skills Practice

Surface Area of Triangular Prisms

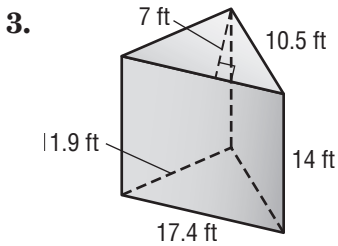
Find the surface area of each triangular prism. Round to the nearest tenth if necessary.



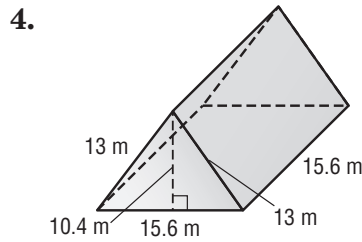
900 yd²



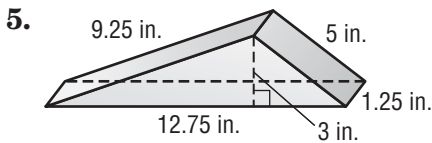
1,176 km²



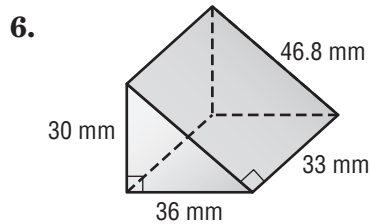
679 ft²



811.2 m²



72 in²



4,802.4 mm²

7. A box of snack crackers is in the shape of a triangular prism. What is the surface area of the box?

231.5 cm²

